

# HOLIDAY HOME WORK

2026-27



CLASS-V

DELHI PUBLIC SCHOOL  
ROURKELA



## ★ Dear Students and Parents, ★

As we begin the summer break, we wish to remind you that while vacations offer a well-deserved rest, academic consistency is a habit that must be nurtured daily.



To keep your intellectual spark alive, we expect every student to dedicate a few hours each day to their studies. Please maintain a dedicated thin notebook for each subject to complete all lessons, creative write-ups, and projects exactly as prescribed by your subject teachers. These organized records of your diligence will be due for submission on **22nd June 2026**.

- Beyond the curriculum, let this summer be a season of holistic growth and empathy. Balance your academic work with physical wellness by practicing Yoga or morning exercises, and challenge yourself to master a new skill that excites you.

### ✿ Stay Active, Stay Healthy ✿



- Amidst the heat, stay hydrated with Aam Panna and fresh juices, and enjoy the simple joys of seasonal mangoes, watermelon, and homemade Kulfi with your family.



- True education also lies in our responsibility toward the world around us. We encourage you to care for the environment and show compassion to all living beings by donating water to birds and stray animals.



- Most importantly, cherish your family time; visit your near and dear ones and seek the wisdom of the elderly. Let this break be a period where you grow not just in knowledge, but in character.



### ★ Stay safe, stay curious, and keep learning. ★

With warm regards,

DELHI PUBLIC SCHOOL ROURKELA



## 1. ENGLISH

**A) Cursive Writing :** Complete pages 8 to 25 in your cursive writing book.

**B) Reading is worth doing !** Books are our best friends and holidays are time to bond with them even more strongly than before. A book is a gift that you can open again and again.

So, go ahead and pick up any one book from the list given below or choose any other book/s of your choice.

Suggested books to read-

- Grandma's Bag of Stories by Sudha Murty
- Carlie and the chocolate factory by Roald Dahl
- The House at the Edge of the Magic

After reading write a paragraph about the story in your own words.

### **C) "My Story, My World" 🌻**

This holiday, you are going to become a storyteller—but with a special twist...

👉 You are the main character of your own story!

🌟 Your Task

Write a short and creative story in which YOU are the hero/heroine. Your story should be based on:

Your daily life (school, home, friends, hobbies), OR

A special memory (birthday, festival, family event), OR

A vacation experience, OR

An unforgettable incident from your past, OR

A small moment that made you happy, proud, or thoughtful

🗨️ **Make It Interesting!**

Your story should not be plain—it should feel alive! Try to include:

🌟 A catchy title

👤 Yourself as the main character

📍 A clear setting (where and when it happened)

💭 Your thoughts and feelings

🗣️ Some dialogues (what people said)

🔄 A beginning, middle, and ending

🎨 **Creative Touch (Very Important!)**

Add at least one of the following:

A drawing or illustration related to your story

A creative border/design

A handwritten note at the end: "Why this story is special to me"

 **Guidelines**

Word limit: 100-150 words

Write neatly in your holiday homework notebook

 **Remember**

Your story doesn't have to be perfect—it just has to be yours.

Make it honest, fun, and full of your personality!

**OR,**

**D )  "Summer Holidays Then and Now"**

**Objective:** To understand how summer holidays have changed across three generations — grandparents, parents, and your own.

 **What You Need to Do:**

Create a project on A4 sheets or a stick file comparing how summer holidays were spent in:

 Your Grandparents' Time

 Your Parents' Time

 Your Present Time

 **Steps to Follow:** **i. Talk & Collect Information**

Ask your grandparents and parents questions like:

- How did you spend your summer holidays?
- What games did you play?
- Did you travel anywhere?
- How was the weather/environment?

**ii. Compare the Three Generations Write about differences in:**

- Daily activities
- Games and hobbies
- Use of technology
- Family time
- Environment (nature, temperature, surroundings)

**iii. Add Pictures or Drawings**

Paste pictures of your grandparents, parents, and yourself (if available)

If not available, draw your imagination of their summer days

**iv. Express Your Thoughts Write a short paragraph:**

Which time do you like the most and why?

What changes do you notice?

 **Presentation Tips:**

- Use headings and neat handwriting
- Add colors, borders, and labels
- Use small sticky notes.

## WORKSHEET

### **Q. Very Short Answer Questions:-**

1. Who wrote the poem "I Wish"?
2. What does the child wish to become?
3. Why does the child want to become a bird?
4. Where does the child want to go?

### **Short Answer Questions:-**

1. Do you think the child likes studying? Why or why not?
2. Why was the teapot proud at the beginning?
3. What animal was lost in the story?
4. Who was searching for the camel?
5. How many men did the traveller meet?

### **Part A: Identify the Type:-**

Q. Write whether the underlined noun is **Abstract, Collective, Countable, or Uncountable**.

1. The team won the match.
2. She showed great kindness.
3. I bought three apples.
4. We need some water.
5. The crowd was cheering loudly.

### **Part B: Fill in the Blanks:-**

Choose the correct noun from the brackets.

1. A \_\_\_\_ of birds flew across the sky. (flock / water)
2. She has a lot of \_\_\_\_ (courage / chairs)
3. I ate two \_\_\_\_\_. (rice / bananas)
4. We saw a \_\_\_\_ of lions. (pride / sugar)
5. Please give me some \_\_\_\_\_. (bread / pencils)

### **Part C: Countable or Uncountable**

Write C for countable and U for uncountable:

- a. Sugar → \_\_\_   b. Chairs → \_   c. Sand → \_   d. Pens → \_   e. Water → \_   f. Books

## **2. ENVIRONMENTAL STUDIES**

### **A. Draw any two aquatic plants and aquatic animal**

EXAMPLE

Animals: Fish, Frog      Plants: Lotus, Water Lily



## B. 🌱 Small Experiment

Take two plants. Give normal water to one and salty water to the other for a few days.  
Write what changes you observe.

YOU CAN RECORD YOUR OBSERVATION IN THE FOLLOWING FORMAT



**SCIENCE EXPERIMENT**

EXPERIMENT TITLE: \_\_\_\_\_

1. AIM OF THE EXPERIMENT

2. MATERIALS USED

3. STEPS / PROCEDURE

4. OBSERVATION

5. CONCLUSION

DRAW OR PASTE A PICTURE OF THE EXPERIMENT

## C. 🍴 Create Your Own Healthy Menu



Imagine you are a chef. Make a one-day healthy menu for your “restaurant”.




Reference Picture

## D. 🐟 Origami Fish Activity

REFERENCE: (OUR WONDROUS WORLD CLASS V NCERT PAGE 20)

Prepare a colorful origami fish using paper.



## E. 🌍 Chapter 1: Our Earth & Water

1. What covers most of the Earth?
2. How can we save water? (any two ways)

✏️ Fill in the Blanks:

1. Most of the Earth is covered with \_\_\_\_.
2. Ocean water is \_\_\_\_ in taste.

## F. Chapter 3: Mystery of Food

What is food preservation? Write any two-preservation method you watched from the link given below

[HTTPS://WWW.YOUTUBE.COM/WATCH?V=X8SGPCLIQJS&PP=YGUZZM9VZCBWCMVZZXJ2YXRPB24GBWV0AG9KCW%3D%3D](https://www.youtube.com/watch?v=x8SGPCLIQJS&pp=ygUZZM9vZCBwcmVzZXJ2YXRpb24GBWV0AG9KCW%3D%3D)

(PRESS CONTROL AND CLICK ON THE ABOVE LINK TO WATCH THE VIDEO)

*NOTE- Dear Students, Kindly complete your Holiday Homework neatly and sincerely.*

 *All the work should be done in a thin notebook or a thin scrapbook.*

### 3. MATHEMATICS

1. Fill in the blanks:-

- (a) The largest 4-digit number is \_\_\_\_\_.
- (b) The smallest 5-digit number is \_\_\_\_\_.
- (c) The place value of 8 in 3486 is \_\_\_\_\_.
- (d) The predecessor of 3000 is \_\_\_\_\_.
- (e) The successor of 6899 is \_\_\_\_\_.
- (f) The place value of \_\_\_\_\_ always remains the same.
- (g) The largest 4-digit number formed using four different digits is \_\_\_\_\_.
- (h) The smallest 4-digit number formed using four different digits is \_\_\_\_\_.

2. Write the following numerals in words:-

- (a) 5476-
- (b) 3940-

3. Write the following numbers in figures:-

- (a) Eight thousand six hundred two-
- (b) Five thousand one hundred-

4. Write the place value and face value of each digit in 8347.

5. Find the difference between the place values of two sevens in 7875.

6. Find the difference between the place value of 3 in 5396 and 5 in 7952.

7. Write each of the following numerals in expanded form:-

- (a) 8629-
- (b) 9470-

8. Write each of the following in short form:-

- (a)  $4000 + 500 + 60 + 1 = \underline{\hspace{2cm}}$
- (b)  $5000 + 80 + 7 = \underline{\hspace{2cm}}$

9. Counting by fives write the numerals from 3037 to 3072.
10. Counting by fifteens write the numerals from 9023 to 9113.
11. Counting by fifties write the numerals in reverse order from 2010 to 1660.
12. Look at the pattern and fill in the blanks:-
- (a) 16, 23, 30, 37, \_\_, \_\_
- (b) 165, 180, 195, 210, \_\_, \_\_
13. Compare the numbers and put the correct symbol  $>$ ,  $<$  or  $=$ :-
- (a) 1001 \_\_ 996
- (b) 5406 \_\_ 5460
14. Arrange the following numbers in ascending order:-
- (a) 7896, 6978, 8967, 9687, 6897, 7968
- (b) 7707, 7070, 7700, 7007, 7077, 7777
15. Arrange the following numbers in descending order:-
- (a) 4003, 3004, 3400, 3043, 4033, 4303
- (b) 5698, 6541, 2000, 6431, 1089, 4320
16. Add:-
- (a)  $6348 + 1479 + 1865$
- (b)  $3986 + 2837 + 2045$
17. Fill in the blanks:-
- (a)  $9067 + 1837 = 1837 + \underline{\hspace{2cm}}$
- (b)  $1088 + (7605 + 5067) = (1088 + \underline{\hspace{2cm}}) + 5067$
18. In a fruit orchard, there are 1978 apple trees, 2563 mango trees and 3075 guava trees. How many fruit trees in all are there?( With statement)
19. In a village, the number of males is 758 more than the number of females. If females are 3246, find total population.(With statement)
20. a) A number has 5 in thousands place and 2 in tens place. Make 3 possible 5-digit numbers.
21. Subtract:-
- (a) 986 from 15403
- (b) 5096 from 8001
22. In an election, winner got 6215 votes and won by 1659 votes. Find votes of defeated candidate.( With statement)
23. What must be added to 3689 to get 5011?
24. What must be subtracted from 7023 to get 4867?
25. The sum of two numbers is 6103. One is 2985. Find the other.
26. Difference of two numbers is 1796. Smaller is 4562. Find larger.
27. Fill in the blanks:-
- (a)  $287 \times 10 = \underline{\hspace{2cm}}$
- (b)  $49 \times 100 = \underline{\hspace{2cm}}$
28. The digit 5 is in the hundreds place. Write the greatest 4-digit number possible.
29. Form the smallest 4-digit number using 0, 3, 7, 9 (no repetition is allowed)

30. How many numbers 10s ,100s ,1000s and 10,000s are there in 54600 ?

**HOTS QUESTIONS:-**

31. Write a number in which the sum of digits is 20 and the digits are different.

32. The place value of a digit is 3000. What could the digit and place be?

33. Find the difference between the largest and smallest 4-digit numbers

34. Frame the smallest and largest number using the digits 8, 2, 5, 1 without repetition and find the difference.

35. A number has 4 in ten thousands , 5 in hundreds and 8 in tens place. Write the number and the number name.

36. Find the nearest tens, hundreds and thousands of the number 5782

37. Write all possible 4-digit numbers using digits 1 and 2 only.

38. Write the greatest number less than 8000 using digits 7, 8, 9, 0.

39. If digits of 4321 are reversed, what is the difference?



40. How many 4-digit numbers can be formed (less than 7000) using digit- 5 , 7, 2 and 4 ?

➤ **Learn Multiplication tables from 2 to 20( ORAL TEST will be taken after holidays)**

➤ **Solve completely Worksheet Chapter-1 (A,B,C,D and E)**

**ACTIVITY:-** Make some 2D and 3D shapes (For Example- Square, rectangle , triangle, cube, cuboid , cone etc using clay and toothpicks and any pattern using paper cuttings or leaves or buttons or beads etc. **(Paste it on a chart paper or a card board)**

**For reference :-**



*{N.B: MAKE A SEPARATE THIN NOTEBOOK AND DO MATHS HOLIDAY HOMEWORK}*

**4. 2<sup>ND</sup> LANGUAGE (ODIA)**

୧- ତୁମ ଘରେ କେଉଁ କେଉଁ ପର୍ବ ପାଳନ କରାଯାଏ ଚିତ୍ର ସହ ତାହା ବର୍ଣ୍ଣନା କରି ଲେଖ ।

୨- ନିମ୍ନଲିଖିତ ଶବ୍ଦଗୁଡ଼ିକର ସମାନାର୍ଥାବୋଧକ ଶବ୍ଦ (ସମାନ ଅର୍ଥ) ଲେଖ ।

ବସୁମତୀ - କୁହାର -

ବିଭବିନାଶକ - ଗୋରସ -

ନବାଜଉଷଣ -

୩- ନିମ୍ନଲିଖିତ ଶବ୍ଦଗୁଡ଼ିକର ବଚନ ବଦଳାଇ ଲେଖ ।

ମୁଖୁଆ- ଗୁରୁଜନ - କୃଷକ - ନଦୀ -

୪- ରଚନା ଲେଖା

\*ରଜପର୍ବ

\*ଗ୍ରୀଷ୍ମଋତୁ

### 5. 3<sup>RD</sup> LANGUAGE (ODIA)

\* "ଏ" କାର ଲଗାଇ ଚିତ୍ର ସହ ୫ ଟି ଶବ୍ଦ ଲେଖ ।

\* "ଓ" କାର ଲଗାଇ ଚିତ୍ର ସହ ୫ ଟି ଶବ୍ଦ ଲେଖ ।

\* | ହସ୍ତ ଲିଖନ (Handwriting) book Page no 1-20 ଲେଖ ।

### 6. 3<sup>RD</sup> LANGUAGE (HINDI)

1. वर्णमाला तीन बार अपनी कॉपी में लिखो ।

2. बिना मात्रा के दो , तीन और चार वर्णों वाले शब्द लिखो । ( 10 each )

### 7. REASONING

Solve Ch-3 ,4 and 5 (Pg no- 15 to 20 ) from Know Your Aptitude Book.

**(Do it in book)**

(REFERENCE-BRIGHT HEARTS 5 PAGE 8)

GRANDMA'S BEANS


1. Write the meaning of the following words

A) Glistening B) Puzzled C) Fragile

2. Answer these

A) What lesson can we learn from beans?

B) What happened to the three things that Grandma had put to boil ?

 *All the work should be done in a thin notebook or a thin scrapbook.*

### 8. ARTIFICIAL INTELLIGENCE

**A. Answer the following questions.**

1. What does WMP stand for?

2. What does KBPS stand for?

3. What does CD stand for?

4. What does DVD stand for?

5. What is the first step to start WMP?

**B. Make a project**

1. Make a presentation on Mother's Day. You need to make a minimum of 10 slides. Give your introduction on the first slide with your name, class, section and roll no. After completing it, send it to me on WhatsApp.

**C. Define the terms**

1. Operating system    2. Internet    3. Software    4. Folder    5. File

**(Note- Question numbers A and C these two answers must be written in your AI notebook)**

## 9. 2<sup>ND</sup> LANGUAGE (HINDI)

# ग्रीष्मकालीन अवकाश गृहकार्य

कक्षा - 5

विषय - हिंदी

पाठ - मंत्री की परख



### पाठ का सार

राजा को अपने राज्य के लिए एक योग्य और बुद्धिमान मंत्री की आवश्यकता थी। उसने कई लोगों की परीक्षा ली और एक ऐसे व्यक्ति को चुना जो बुद्धिमान, ईमानदार और प्रजा के हित में सोचने वाला था। यह कहानी हमें सिखाती है कि बुद्धि और विवेक ही सच्ची योग्यता है।



### शब्दार्थ

परख - जाँच, परखना  
मंत्री - राज्य के कामों में सलाह देने वाला व्यक्ति  
योग्य - जो किसी काम के लिए उपयुक्त हो  
बुद्धिमान - समझदारी  
ईमानदार - सच बोलने वाला

### A. लघु उत्तरीय प्रश्न

1. कहानी में कितने राजा थे?
2. राजा को मंत्री क्यों चाहिए था?
3. मंत्री चुनने के लिए क्या किया गया?
4. योग्य मंत्री में कौन-सी विशेषता होनी चाहिए?
5. इस कहानी से हमें क्या शिक्षा मिलती है?

### B. दीर्घ उत्तरीय प्रश्न

1. "मंत्री की परख" कहानी का सार अपने शब्दों में लिखिए।
2. यदि आप राजा होते तो मंत्री कैसे चुनते? अपने विचार लिखिए।

### C. बहुविकल्पीय प्रश्न (MCQ)

1. राजा क्या खोज रहा था?  
(क) सैनिक (ख) मंत्री (ग) व्यापारी (घ) किसान
2. मंत्री के लिए सबसे जरूरी गुण क्या था?  
(क) ताकत (ख) धन (ग) बुद्धिमान (घ) सुंदरता
3. कहानी हमें क्या सिखाती है?  
(क) मेहनत (ख) ईमानदारी  
(ग) बुद्धि का महत्व (घ) खेल
4. राजा ने किसकी परीक्षा ली?  
(क) बच्चों की (ख) लोगों की  
(ग) सैनिकों की (घ) जानवरों की

### D. सही या गलत लिखिए

1. राजा को एक मंत्री की आवश्यकता थी। \_\_\_\_\_
2. राजा ने बिना परीक्षा के मंत्री चुन लिया। \_\_\_\_\_
3. कहानी हमें बुद्धि का महत्व सिखाती है। \_\_\_\_\_
4. मंत्री प्रजा के लिए काम करता है। \_\_\_\_\_
5. राजा ने केवल सैनिकों की परीक्षा ली। \_\_\_\_\_

### E. मिलान कीजिए


- |              |                     |
|--------------|---------------------|
| 1. राजा      | (क) जाँच            |
| 2. मंत्री    | (ख) होशियार व्यक्ति |
| 3. परख       | (ग) राज्य के लोग    |
| 4. बुद्धिमान | (घ) सलाह देने वाला  |
| 5. प्रजा     | (ङ) राज्य का शासक   |

### F. वाक्य बनाइए

1. मंत्री - \_\_\_\_\_
2. राजा - \_\_\_\_\_
3. परीक्षा - \_\_\_\_\_
4. बुद्धिमान - \_\_\_\_\_
5. ईमानदार - \_\_\_\_\_

### G. चित्र बनाइए और रंग भरिए

1. राजा और दरबार का दृश्य
2. बैलगाड़ी
3. पौधा और पेड़



### H. गतिविधि (Activity)

नीचे दिए गए विचार नक्शे (Mind Map) को पूरा कीजिए।



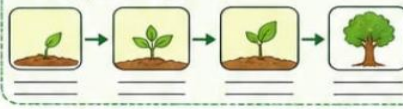
### I. रचनात्मक कार्य

1. "अगर मैं मंत्री होता/होती..." विषय पर 5 पंक्तियाँ लिखिए।
2. राजा और मंत्री का संवाद लिखकर एक छोटा नाटक तैयार कीजिए।
3. कहानी से आपको सबसे अच्छी बात कौन-सी लगी? लिखिए।



### J. पर्यावरण गतिविधि

एक पौधा लगाइए और उसकी देखभाल कीजिए। उसके बढ़ने की प्रक्रिया को नीचे दिए चार्ट में लिखिए/चित्र बनाइए।



### K. अच्छे काम

अवकाश में आप कौन-कौन से अच्छे काम करेंगे? तीन लिखिए।

1. \_\_\_\_\_
2. \_\_\_\_\_
3. \_\_\_\_\_



\* Complete your 2<sup>ND</sup> Language Hindi work in a thin scrapbook .

\* Maintain neatness and cleanliness in all your work.

## 10.MORAL SCIENCE

(REFERENCE-BRIGHT HEARTS 5 PAGE 8)

### GRANDMA'S BEANS

1. Write the meaning of the following words

A) Glistening B) Puzzled C) Fragile


2. Answer these

A) What lesson can we learn from beans?

B) What happened to the three things that Grandma had put to boil ?

 *All the work should be done in a thin notebook or a thin scrapbook.*

## 11.GENERAL KNOWLEDGE

 Fill in the Blanks

A. The capital of Odisha is \_\_\_\_.

B. The largest lake in Odisha is \_\_\_\_ Lake.

C. The famous temple of Lord Jagannath is in \_\_\_\_.

D. The classical dance form of Odisha is called \_\_\_\_.

E. The river Mahanadi flows through \_\_\_\_ state.

F. The famous festival of chariots is called \_\_\_\_ Yatra.

G. The state animal of Odisha is \_\_\_\_.

H. The state bird of Odisha is \_\_\_\_.

I. Odisha was earlier known as \_\_\_\_.

J. The Sun Temple of Odisha is located at \_\_\_\_.

 **Multiple Choice Questions (MCQs)**

1. Which is the capital city of Odisha?

A) Cuttack                      B) Bhubaneswar                      C) Puri                      D) Rourkela

2. Which temple is known worldwide in Odisha?

A) Meenakshi Temple      B) Golden Temple      C) Jagannath Temple      D) Kedarnath Temple

3. What is the classical dance of Odisha?

A) Bharatanatyam              B) Kathak                      C) Odissi                      D) Kuchipudi

4. Which lake is famous in Odisha?

A) Dal Lake              B) Vembanad Lake                      C) Chilika Lake              D) Loktak Lake

5. Which festival is famous in Puri?

A) Diwali                      B) Holi                              C) Durga Puja                      D) Rath Yatra

6. Which is the state animal of Odisha?

A) Tiger                      B) Elephant      C) Lion                      D) Deer

7. Which temple is known as the Black Pagoda?

A) Lingaraj Temple      B) Jagannath Temple      C) Konark Sun Temple      D) Mukteshwar Temple

8. Which river is the longest in Odisha?

A) Godavari              B) Mahanadi      C) Yamuna              D) Krishna

9. Odisha was earlier called:

A) Bihar B) Bengal C) Kalinga D) Assam

10. Which city is famous for steel production?

A) Puri B) Cuttack C) Rourkela D) Sambalpur

## 12.ART AND CRAFT

1.Draw a beautiful Scenery of a Village.

Materials- 1/4 chart paper, Oil pastel colour

2.Creative craft work

Topic- Aquarium

Materials- A3 size cardboard, Acrylic colour, old news paper, 1 white chart paper and 1 blue chart paper, glue and scissors

Instruction – Paste blue chart paper on cardboard. Make some pebbles and aquatic tree out of newspaper and paste on the prepared board, then colour the tree and pebbles.

Then draw and colour some sea animals on white chart paper, cut and paste those animals on board.

